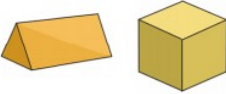



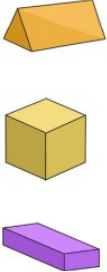










w/c 29nd June	Addition	Subtraction	Shape	Number	Other
Monday	Don't forget to count on from the largest number $22 + \underline{\quad} = 30$ $14 + \underline{\quad} = 30$	Remember you could choose a number line or crossing out. $20 - \underline{\quad} = 8$ $20 - \underline{\quad} = 6$	Draw lines to match the name and the shape.  cube triangular prism	How much money is here?  	Colour half of these shapes. 
https://whiterosemaths.com/homelearning/year-1/ Summer Term - Week 8: Lesson 1 - Arrays with tutorial and activity with answers					
Tuesday	$15 + \underline{\quad} = 25$ $10 + \underline{\quad} = 17$	$30 - \underline{\quad} = 25$ $30 - \underline{\quad} = 20$	 cube cuboid triangular prism	Imagine seeing 2 elephants at the zoo. How many legs would you see? 	Colour half of these shapes. 
https://whiterosemaths.com/homelearning/year-1/ Summer Term - Week 8: Lesson 2 - Doubles with tutorial and activity with answers					

<p>Wednesday</p>	$17 + \underline{\quad} = 26$ $39 + \underline{\quad} = 40$	$37 - \underline{\quad} = 30$ $45 - \underline{\quad} = 41$	<p>How many sides do the shapes have altogether?</p>  <input data-bbox="1122 395 1223 491" type="text"/>	<p>How much money is here?</p>  <input data-bbox="1458 411 1675 499" type="text"/>	<p>Which line is the longest?</p> <p>A</p> <hr/> <p>B</p> <hr/> <p>C</p> <hr/> <input data-bbox="2056 363 2175 432" type="text"/>				
<p>https://whiterosemaths.com/homelearning/year-1/ Summer Term - Week 8: Lesson 3 - Sharing with tutorial and activity with answers</p>									
<p>Thursday</p>	$34 + \underline{\quad} = 40$ $82 + \underline{\quad} = 90$	$50 - \underline{\quad} = 46$ $40 - \underline{\quad} = 32$	<p>How many sides do the shapes have altogether?</p>  <input data-bbox="1122 794 1223 890" type="text"/>	<p>Shep had 3 dog biscuits. Rover had 4. How many more biscuits did Rover have?</p>  <input data-bbox="1554 786 1675 858" type="text"/>	<p>Which jug is full? Tick the correct one.</p> 				
<p>https://whiterosemaths.com/homelearning/year-1/ Summer Term - Week 8: Lesson 1 - Grouping with tutorial and activity with answers</p>									
<p>Friday</p>	$90 + \underline{\quad} = 100$ $56 + \underline{\quad} = 66$	$15 - \underline{\quad} = 0$ $34 - \underline{\quad} = 32$	<p>How many sides do the shapes have altogether?</p>  <input data-bbox="1122 1281 1223 1377" type="text"/>	<p>Order these numbers from smallest to largest.</p> <p>32 18 27 81</p> <table border="1" data-bbox="1350 1182 1597 1241"> <tr> <td style="width: 25px; height: 25px;"></td> <td style="width: 25px; height: 25px;"></td> <td style="width: 25px; height: 25px;"></td> <td style="width: 25px; height: 25px;"></td> </tr> </table>					<p>If today is Tuesday, what is it tomorrow? Put a circle around the correct day.</p> <p>Monday Wednesday Thursday</p>

<https://whiterosemaths.com/homelearning/year-1/>

Summer Term - Week 8: Friday challenge