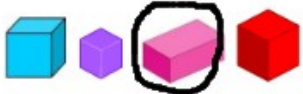
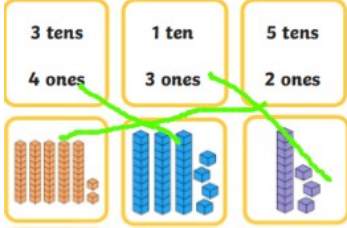
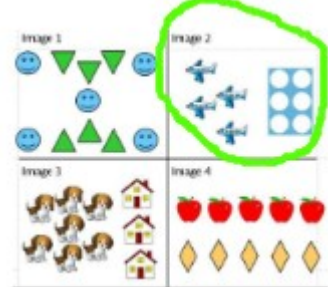

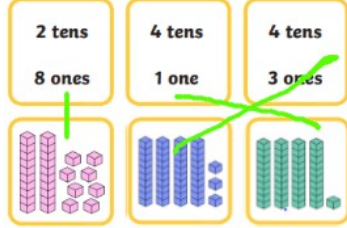


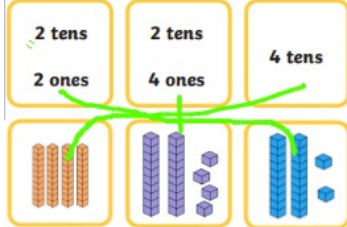


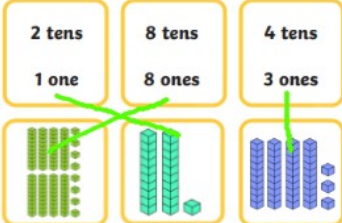


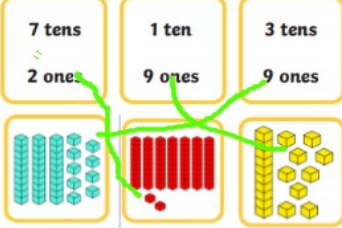


w/c 22nd June	Addition	Subtraction	Shape	Number	Other
Monday	$13 + 7 = 20$ $11 + 9 =$	$20 - 14 = 6$ $20 - 6 = 14$	 <p>It is a cuboid and the rest are cubes.</p>		 <p>This is 14 the rest are 10.</p>
Tuesday	$16 + 4 = 20$ $15 + 5 = 20$	$20 - 15 = 5$ $20 - 5 = 15$	 <p>It is a cone and the rest are pyramids.</p>		 <p>This 16 the rest are 15.</p>
Wednesda y	$17 + 3 = 20$ $12 + 8 = 20$	$20 - 3 = 17$ $20 - 17 = 3$	 		 <p>This is 14 and the rest are 17.</p>

<p>Thursday</p>	<p>$11 + 9 = 20$</p> <p>$18 + 2 = 20$</p>	<p>$20 - 9 = 11$</p> <p>$20 - 11 = 9$</p>			
<p>Friday</p>	<p>$14 + 6 = 20$</p> <p>$10 + 10 = 20$</p>	<p>$20 - 14 = 6$</p> <p>$20 - 6 = 14$</p>			<p>There are 4 rabbits and parrots for sale. How many animals is that altogether?</p> <p>12</p> 