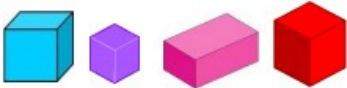
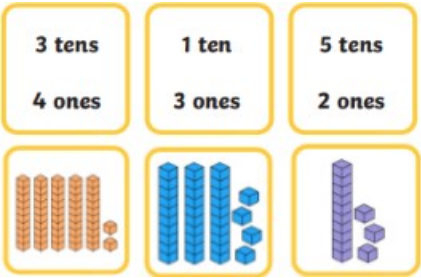
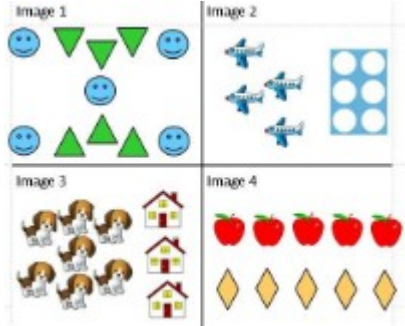
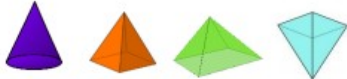
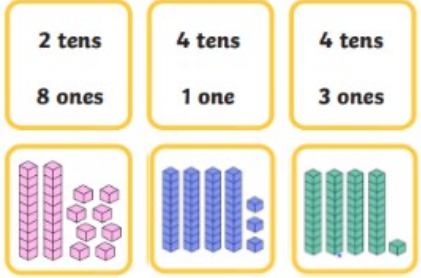



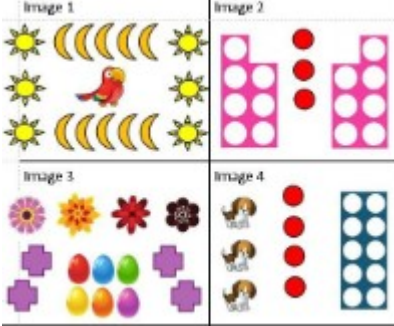





| w/c 22nd June | Addition | Subtraction | Shape | Number | Other |
|--------------------------------------------------------------------------------------------------------------------------------------------------------------------------------------------------------|----------------------------------------------------------------------------------|-----------------------------------------------------------------------------------------------------------|----------------------------------------------------------------------------------------------------------------------------|----------------------------------------------------------------------------------------------------------------------------------------|----------------------------------------------------------------------------------------------------------------------------|
| Monday | Try drawing the tens and ones as dienes to help you. $13 + 7 =$ $11 + 9 =$ | Try making a number line to use. Remember to count in the correct direction. $20 - 14 =$ $20 - 6 =$ | Circle the odd one out in the group  | Draw a line to match the number to the dienes.  | Circle the odd one out. Why it is?  |
| https://whiterosemaths.com/homelearning/year-1/ Summer Term - Week 6: Lesson 1 - Measure mass with tutorial and activity with answers | | | | | |
| Tuesday | $16 + 4 =$ $15 + 5 =$ | $20 - 15 =$ $20 - 5 =$ | Circle the odd one out in the group  | Draw a line to match the number to the dienes.  | Circle the odd one out. Why it is?  |
| https://whiterosemaths.com/homelearning/year-1/ Summer Term - Week 6: Lesson 2 - Compare mass with tutorial and activity with answers | | | | | |
| Wednesda | | | Circle all the triangles | Draw a line to match the | Circle the odd one out. Why it is? |

| | | | | | |
|---|--------------------------|---------------------------|------------------------------------------------------------------------------------|--------------------------------------------------------------------------------------------------------------------------------------------------------------------------------------------------------------------------------------------------------------------------------------------------------------------------------------------------------------------------------------------------------------------------------------------------|-------------------------------------------------------------------------------------|
| y | $17 + 3 =$ $12 + 8 =$ | $20 - 3 =$ $20 - 17 =$ |  | <p>number to the dienes.</p> <div style="display: flex; justify-content: space-around;"> <div style="border: 1px solid black; padding: 5px; width: 30%;">2 tens 2 ones</div> <div style="border: 1px solid black; padding: 5px; width: 30%;">2 tens 4 ones</div> <div style="border: 1px solid black; padding: 5px; width: 30%;">4 tens</div> </div>  |  |
|---|--------------------------|---------------------------|------------------------------------------------------------------------------------|--------------------------------------------------------------------------------------------------------------------------------------------------------------------------------------------------------------------------------------------------------------------------------------------------------------------------------------------------------------------------------------------------------------------------------------------------|-------------------------------------------------------------------------------------|




<https://whiterosemaths.com/homelearning/year-1/>

Summer Term - Week 6: Lesson 3 - Introduce capacity and volume with tutorial and activity with answers

| | | | | | |
|----------|--------------------------|---------------------------|---------------------------------------------------------------------------------------------------------------------|-------------------------------------------------------------------------------------------------------------------------------------------------------------------------------------------------------------------------------------------------------------------------------------------------------------------------------------------------------------------------------------------------------------------------------|--------------------------------------------------------------------------------------------------------------------------------------------------------------------------------------------------------------------------------------------------------------|
| Thursday | $11 + 9 =$ $18 + 2 =$ | $20 - 9 =$ $20 - 11 =$ | <p>Circle all the rectangles</p>  | <div style="display: flex; justify-content: space-around;"> <div style="border: 1px solid black; padding: 5px; width: 30%;">2 tens 1 one</div> <div style="border: 1px solid black; padding: 5px; width: 30%;">8 tens 8 ones</div> <div style="border: 1px solid black; padding: 5px; width: 30%;">4 tens 3 ones</div> </div>  | <p>How long is the snake?</p>  <div style="border: 1px solid black; display: inline-block; padding: 5px; margin-top: 10px;"> <input type="text" value="6"/> cm </div> |
|----------|--------------------------|---------------------------|---------------------------------------------------------------------------------------------------------------------|-------------------------------------------------------------------------------------------------------------------------------------------------------------------------------------------------------------------------------------------------------------------------------------------------------------------------------------------------------------------------------------------------------------------------------|--------------------------------------------------------------------------------------------------------------------------------------------------------------------------------------------------------------------------------------------------------------|

<https://whiterosemaths.com/homelearning/year-1/>

Summer Term - Week 6: Lesson 1 - Measure capacity with tutorial and activity with answers

| | | | | | |
|--------|---------------------------|---------------------------|--------------------------------------------------------------------------------------------------------------------|---------------------------------------------------------------------------------------------------------------------------------------------------------------------------------------------------------------------------------------------------------------------------------------------------------------------------------------------------------------------------------------------------------------------------------|-----------------------------------------------------------------------------------------------------------------------------------------------------------------------------|
| Friday | $14 + 6 =$ $10 + 10 =$ | $20 - 14 =$ $20 - 6 =$ | <p>Continue the patterns.</p>  | <div style="display: flex; justify-content: space-around;"> <div style="border: 1px solid black; padding: 5px; width: 30%;">7 tens 2 ones</div> <div style="border: 1px solid black; padding: 5px; width: 30%;">1 ten 9 ones</div> <div style="border: 1px solid black; padding: 5px; width: 30%;">3 tens 9 ones</div> </div>  | <p>There are 4 rabbits and parrots for sale. How many animals is that altogether?</p>  |
|--------|---------------------------|---------------------------|--------------------------------------------------------------------------------------------------------------------|---------------------------------------------------------------------------------------------------------------------------------------------------------------------------------------------------------------------------------------------------------------------------------------------------------------------------------------------------------------------------------------------------------------------------------|-----------------------------------------------------------------------------------------------------------------------------------------------------------------------------|

<https://whiterosemaths.com/homelearning/year-1/>

Summer Term - Week 6: Friday challenge